

CogAT Sample Test

Cognitive Abilities Test

Grades K-8

You will be taking a sample test called the CogAT (Cognitive Abilities Test). This test tells how you solve puzzles and how you learn NOT what you know. There are 3 parts to the test.

- **Verbal** (*word puzzles*) 10 questions
- **Quantitative** (*number puzzles*) 10 questions
- **Nonverbal** (*picture/spatial puzzles*) 10 questions

Here's what the verbal questions look like:

Question-

Which word best fits with this group:

Foot Paw Claw

Answer Choices:

A) Wing B) Leg
C) Hoof D) Arm

Which word best fits with this group:

Foot Paw Claw

Answer Choices:

A) Wing B) Leg
C) Hoof D) Arm

Did you choose C) Hoof? A hoof is a type of foot of an animal just like a paw and a claw.

Here's what the verbal questions look like:

Question-

knife: cut :: ruler

Answer Choices:

A)sews B) counts

C) tapes D) measure

Question-

knife: cut :: ruler

Answer Choices:

- A) sews B) counts
C) tapes D) measure

You can use a knife to cut something like
you can use a rule to measure
something.

Here's what the quantitative questions look like:

Question-

What comes next in the pattern?

1 2 1 1 2 1

A) 1 B) 2 C) 0 D) 3

Here's what the quantitative questions look like:

Question-

What comes next in the pattern?

1 2 1 1 2 1

The answer is

A) 1 B) 2 C) 0 D) 3

The pattern is 12112112

Here's what the quantitative questions look like:

Question-

Daniela has 4 stuffed animals. She gives away 2 and then her mother gives her 2 more. How many does she have now?

A) 1 B) 2 C) 3 D) 4

Here's what the quantitative questions look like:

Question-

Daniela has 4 stuffed animals. She gives away 2 and then her mother gives her 2 more. How many does she have now?

The answer is ..

A) 1 B) 2 C) 3 **D) 4**

Here's what the quantitative questions look like:

Question-

Use the numbers and symbols to create one of the answers below

123 + -

A) 4 B) 3 C) 1 D) 7

Here's what the quantitative questions look like:

Question-

Use the numbers and symbols to create one of the answers below

123 + -


Answer:

A) 4 B) 3 C) 1 D) 7

$$3+2=5-1=4$$

Here's what the quantitative questions look like:

Question—Look at the 3 shapes in front of the line. What so they have in common. Which of the 4 shapes behind the line follow the same rule?



☐ A

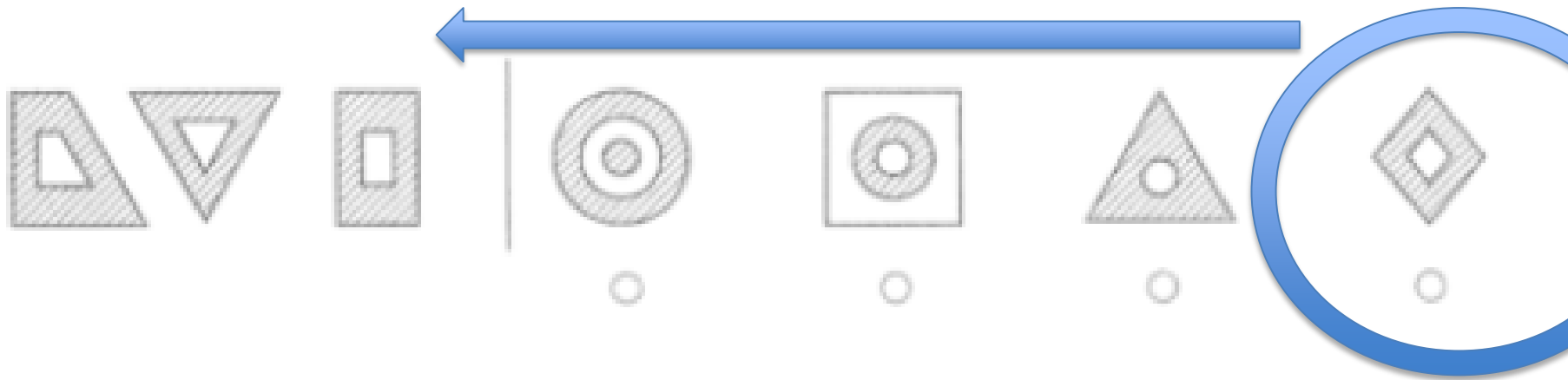
☐ B

☐ C

☐ D

Here's what the quantitative questions look like:

Question— Look at the 3 shapes in front of the line. What so they have in common. Which of the 4 shapes behind the line follow the same rule?



☐ A

☐ C

☐ B

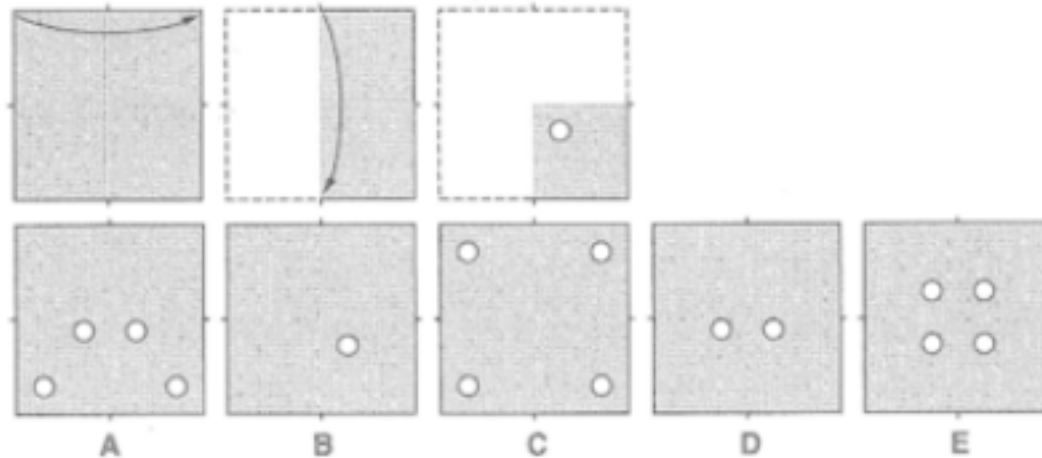
☒ D

D is the correct answer because it has the two of the same shape. The outside shape is a diamond and the inside shape is a diamond. The outside shape is shaded gray. The inside shape is white.

Here's what the quantitative questions look like:

This paper has been folded and hole-punched.

Question—Then it was opened. Where would the holes be when the paper is opened?



☐ A

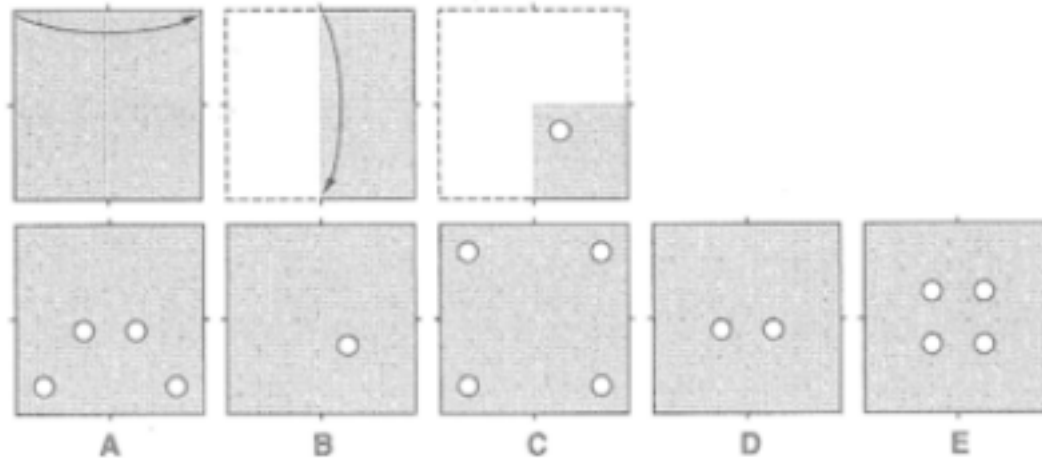
☐ C

☐ D

☐ E

Here's what the quantitative questions look like:

Question—This paper has been folded and hole-punched. Then it was opened. Where would the holes be when the paper is opened?



☐ A

☐ D

☐ C

☒ E

The answer is E because if the shape is folded in four squares and the hole is in the inside left corner, there will be a hole in the inside corner of each square.